

ADDING Fractions

A **TIC-TAC-TOE GAME**
Valentine's Day Edition

4.NF.3

GO

$\frac{1}{5}$

© 2016 Powerpoint Gaming

Which Game?

GAME 1
LIKE FRACTIONS

GAME 2
FRACTIONS WITH SIMPLIFYING

QUIT

GAME 3
MIXED REVIEW

HOW TO USE

© 2016 Powerpoint Gaming

HOW TO PLAY

- THERE ARE 4 GAMES:
 - **GAME 1**
 - **GAME 2**
 - **GAME 3**
- LIKE REGULAR TIC-TAC-TOE, TRY TO GET 3 IN A ROW TO WIN.
- CLICK ON A SQUARE TO GO TO YOUR FIRST QUESTION.
- ANSWER THE QUESTION.
- IF ANSWERED CORRECTLY, CLICK ON THE TEAM'S RESPECTIVE LETTER (X OR O).
- IF THE ANSWER IS WRONG, GIVE IT TO OTHER TEAM.
- CLICK ON THE CORRECT O OR X.
- WHEN CLICKING ON THE 'O', CLICK ON THE SIDE, **NOT IN THE CENTER!**
- CLICK **"ANSWER"** TO REVEAL THE ANSWER.
- CLICK **"GAME BOARD"** TO GO TO THE TIC-TAC-TOE BOARD.
- CLICK **"GAME MODE"** TO BACK TO CHOOSE A DIFFERENT THE GAME.

START

© 2016 Powerpoint Gaming

X Game Board #1 O

?	?	?
?	?	?
?	?	?


STOP

GAME MODE



© 2016 Powerpoint Gaming

By purchasing this product, you agree not to share, resell, copy, or alter this product in anyway. You agree not share without the purchase of multiple licenses. All sales final.


© 2016 Powerpoint Gaming (Chandra Martin)

 **GAME #1 - SQUARE #1**
ADD THESE FRACTIONS.



$$\frac{3}{7} + \frac{1}{7} = \frac{4}{7}$$


© 2016 Powerpoint Gaming

 **GAME #1 - SQUARE #2**
ADD THESE FRACTIONS.



$$\frac{5}{9} + \frac{2}{9} = \frac{7}{9}$$

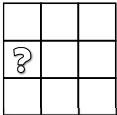
© 2016 Powerpoint Gaming

 **GAME #1 - SQUARE #3**
ADD THESE FRACTIONS.



$$\frac{1}{3} + \frac{1}{3} = \frac{2}{3}$$

© 2016 Powerpoint Gaming

 **GAME #1 - SQUARE #4**
ADD THESE FRACTIONS.


$$\frac{1}{3} + \frac{1}{3} = \frac{2}{3}$$



© 2016 Powerpoint Gaming

By purchasing this product, you agree not to share, resell, copy, or alter this product in anyway. You agree not share without the purchase of multiple licenses. All sales final.


© 2016 Powerpoint Gaming (Chandra Martin)

 **GAME #2 - SQUARE #1**
ADD THESE FRACTIONS.



$$\frac{5}{16} + \frac{5}{16} = \frac{5}{8}$$


© 2016 Powerpoint Gaming

 **GAME #2 - SQUARE #2**
ADD THESE FRACTIONS.



$$\frac{7}{20} + \frac{8}{20} = \frac{3}{4}$$

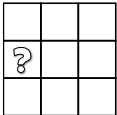
© 2016 Powerpoint Gaming

 **GAME #2 - SQUARE #3**
ADD THESE FRACTIONS.



$$\frac{1}{12} + \frac{1}{12} = \frac{1}{6}$$

© 2016 Powerpoint Gaming

 **GAME #2 - SQUARE #4**
ADD THESE FRACTIONS.

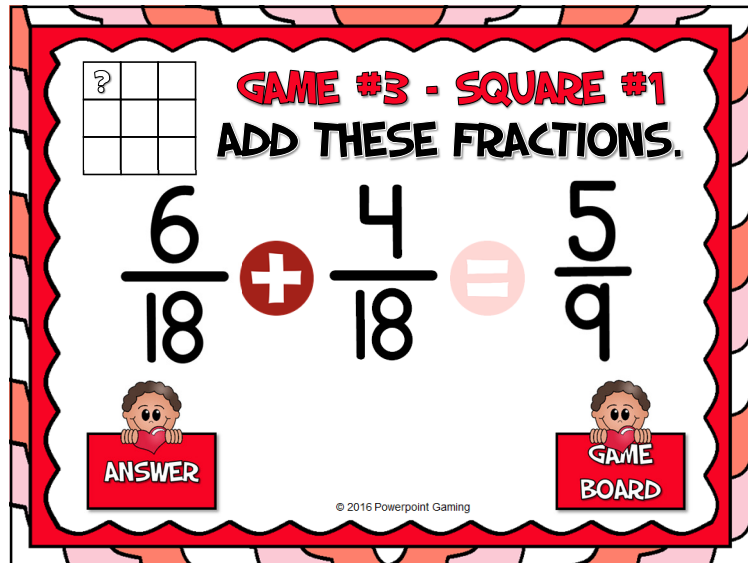
$$\frac{1}{10} + \frac{3}{10} = \frac{2}{5}$$

© 2016 Powerpoint Gaming

By purchasing this product, you agree not to share, resell, copy, or alter this product in anyway. You agree not share without the purchase of multiple licenses. All sales final.

© 2016 Powerpoint Gaming (Chandra Martin)



A 3x3 grid with a question mark in the top-left cell.

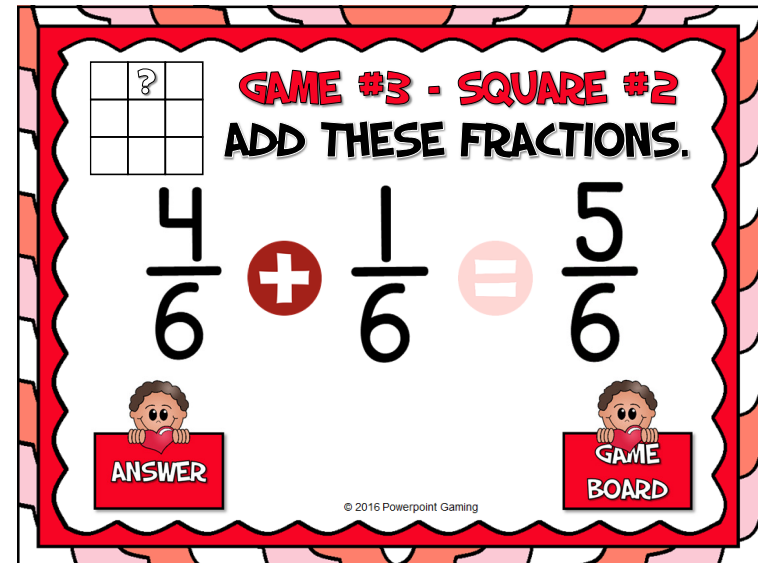
GAME #3 - SQUARE #1
ADD THESE FRACTIONS.

$$\frac{6}{18} + \frac{4}{18} = \frac{5}{9}$$

ANSWER

GAME BOARD

© 2016 Powerpoint Gaming



A 3x3 grid with a question mark in the top-right cell.

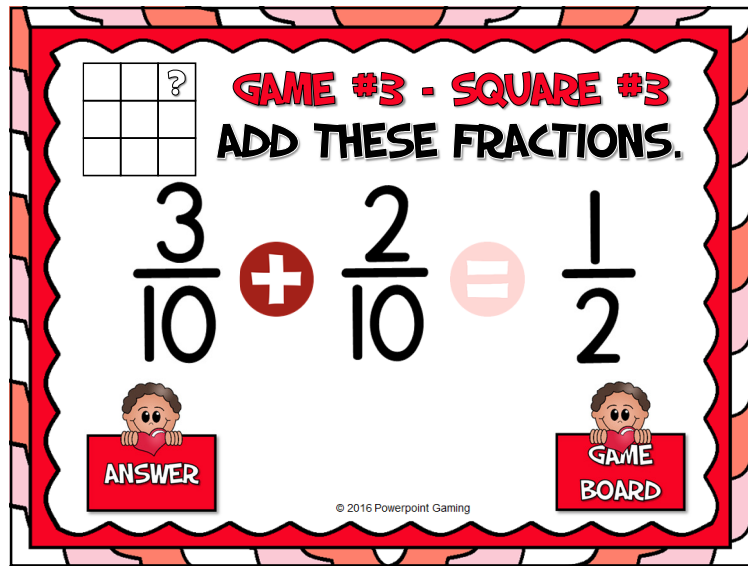
GAME #3 - SQUARE #2
ADD THESE FRACTIONS.

$$\frac{4}{6} + \frac{1}{6} = \frac{5}{6}$$

ANSWER

GAME BOARD

© 2016 Powerpoint Gaming



A 3x3 grid with a question mark in the top-right cell.

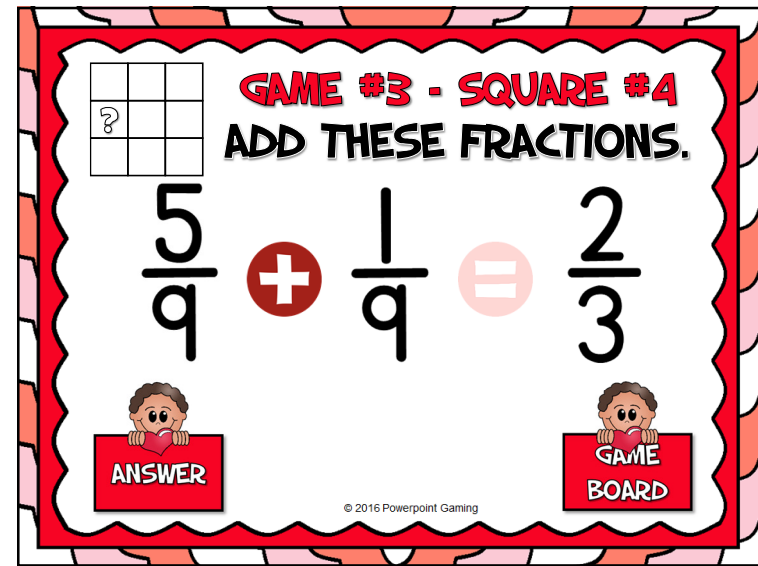
GAME #3 - SQUARE #3
ADD THESE FRACTIONS.

$$\frac{3}{10} + \frac{2}{10} = \frac{1}{2}$$

ANSWER

GAME BOARD

© 2016 Powerpoint Gaming



A 3x3 grid with a question mark in the top-left cell.

GAME #3 - SQUARE #4
ADD THESE FRACTIONS.

$$\frac{5}{9} + \frac{1}{9} = \frac{2}{3}$$

ANSWER

GAME BOARD

© 2016 Powerpoint Gaming